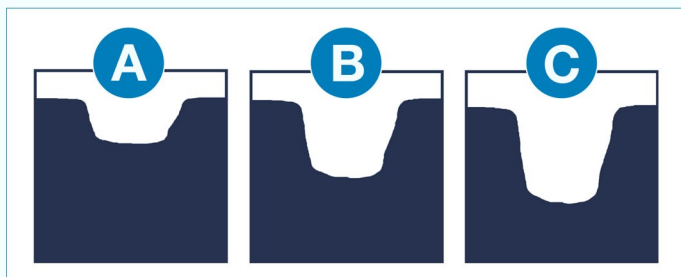


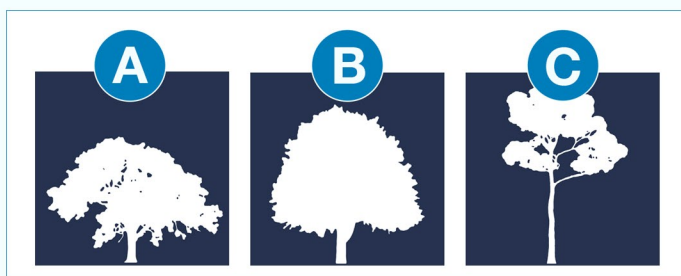
Dimensions

Use the useful vocabulary chart to help you complete these sentences about height, width and depth. Write the correct words in the spaces provided.


i. Hole **C** is the _ _ _ _ _



ii. Tree **A** is the _ _ _ _ _



iii. Tree **A** is the _ _ _ _ _

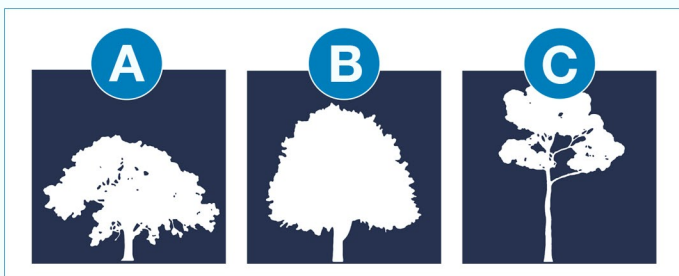


OPTIONS

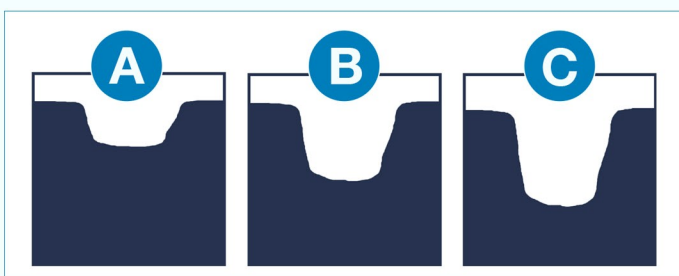
largest
smallest
tallest
shortest
widest
narrowest
deepest
shallowest

Dimensions (continued)

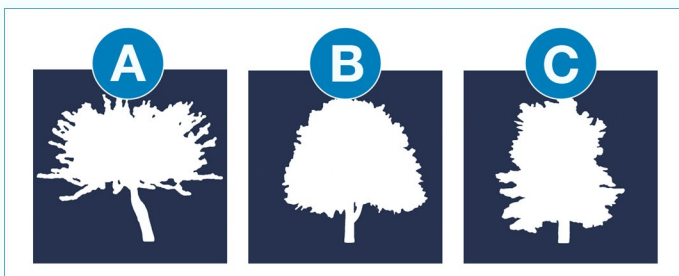
iv. Tree **C** is the _ _ _ _ _



v. Hole **A** is the _ _ _ _ _



vi. Tree **C** is the _ _ _ _ _




OPTIONS

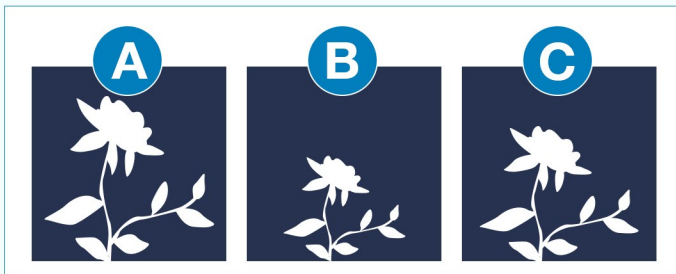
largest
smallest
tallest
shortest
widest
narrowest
deepest
shallowest

Dimensions (continued)

vii. Plant **B** is the _ _ _ _ _



viii. Plant **B** is the _ _ _ _ _



OPTIONS

largest
smallest
tallest
shortest
widest
narrowest
deepest
shallowest